



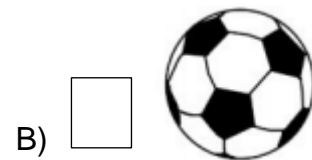


ATIVIDADE 8

PONTE DO SABER




1ª e 2ª série da EJA

1 - RELACIONE AS FIGURAS GEOMÉTRICAS AOS OBJETOS QUE APRESENTAM A MESMA FORMA:

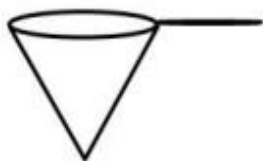


2- QUAL DOS OBJETOS ABAIXO SE PARECE MAIS COM A FORMA DE UM **CÍRCULO**?



3- QUAL DOS OBJETOS ABAIXO SE PARECE MAIS COM A FORMA DE UM QUADRADO:

A



B



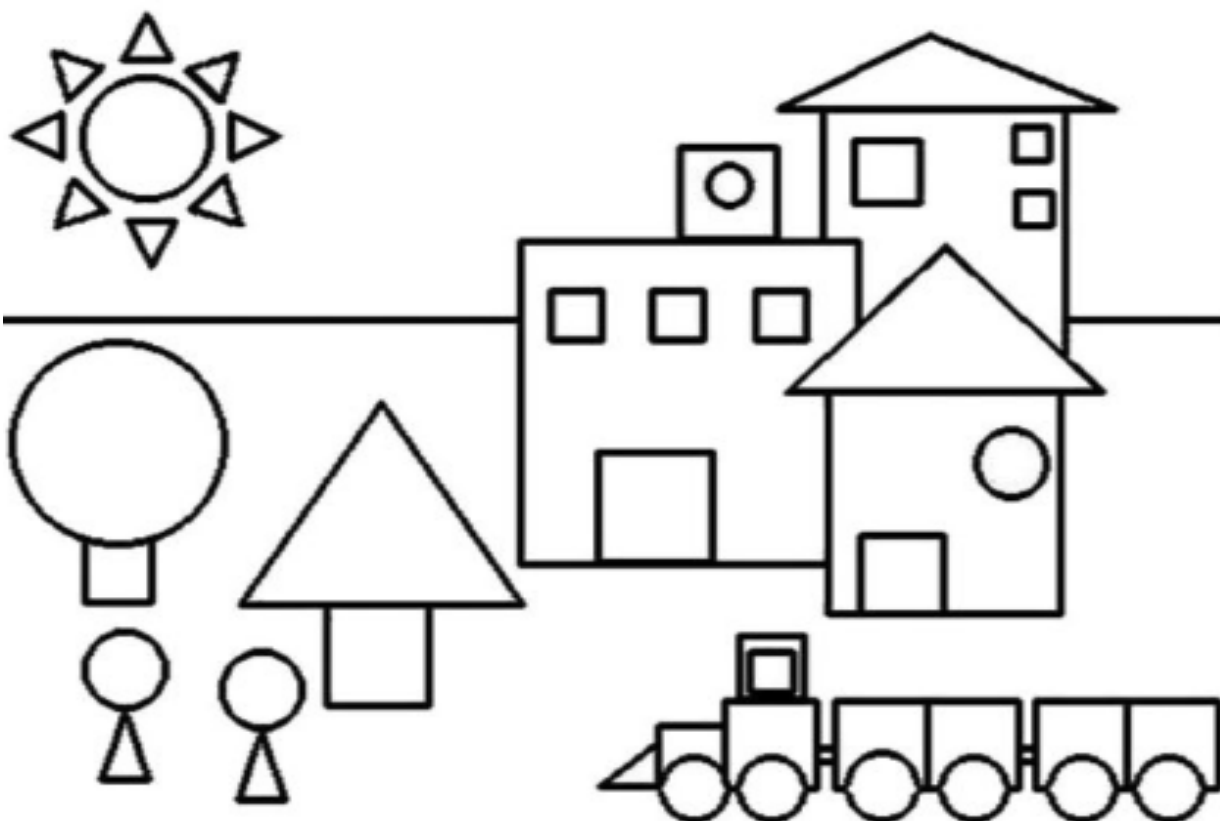
C




D



OBSERVE O DESENHO:



4- CONTE AS FORMAS GEOMÉTRICAS DO DESENHO ACIMA E REGISTRE A ALTERNATIVA CORRETA:



A) 10

B) 12


C) 14



A) 13

B) 19

C) 21



A) 14

B) 19

C) 21